


Elapsed time - one hour

Grade 1 Time Worksheet


Draw the clock hands to show the time it will be after one hour.

1.




What time will it be in 1 hour 0 minutes?

2.




What time will it be in 1 hour 0 minutes?

3.




What time will it be in 1 hour 0 minutes?

4.




What time will it be in 1 hour 0 minutes?

5.



What time will it be in 1 hour 0 minutes?

6.




What time will it be in 1 hour 0 minutes?

Elapsed time - one hour

Grade 1 Time Worksheet


Draw the clock hands to show the time it will be after one hour.

1.




What time will it be in 1 hour 0 minutes?

2.



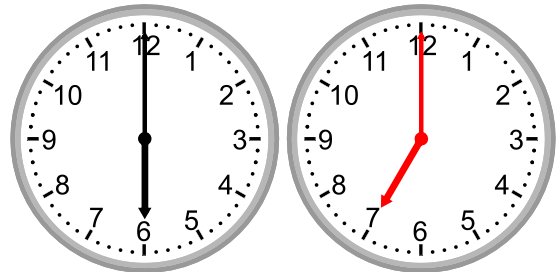
What time will it be in 1 hour 0 minutes?

3.




What time will it be in 1 hour 0 minutes?

4.




What time will it be in 1 hour 0 minutes?

5.



What time will it be in 1 hour 0 minutes?

6.



What time will it be in 1 hour 0 minutes?